



Use the box provided to show a visual example of how to multiply two fractions.

Answers

Ex) $\frac{3}{5} \times \frac{2}{3} =$

1) $\frac{4}{8} \times \frac{2}{3} =$

2) $\frac{5}{6} \times \frac{1}{3} =$

3) $\frac{2}{5} \times \frac{3}{8} =$

4) $\frac{3}{5} \times \frac{8}{9} =$

5) $\frac{1}{3} \times \frac{1}{2} =$

6) $\frac{3}{4} \times \frac{8}{9} =$

7) $\frac{1}{2} \times \frac{3}{6} =$

8) $\frac{4}{6} \times \frac{4}{6} =$

9) $\frac{2}{7} \times \frac{5}{6} =$

10) $\frac{4}{8} \times \frac{5}{8} =$

11) $\frac{1}{2} \times \frac{1}{3} =$

Ex. $\frac{6}{15}$

1. _____

2. _____

3. _____

4. _____

5. _____

6. _____

7. _____

8. _____

9. _____

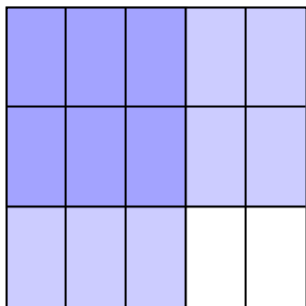
10. _____

11. _____

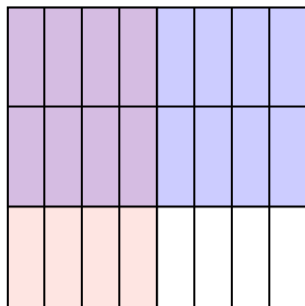


Use the box provided to show a visual example of how to multiply two fractions.

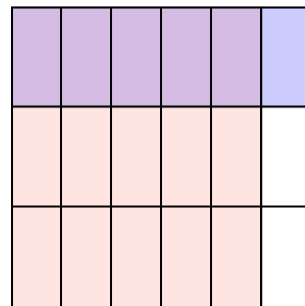
Ex) $\frac{3}{5} \times \frac{2}{3} =$



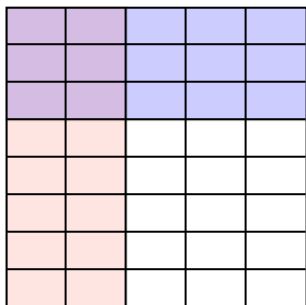
1) $\frac{4}{8} \times \frac{2}{3} =$



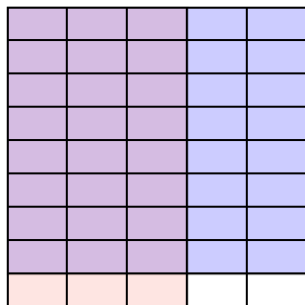
2) $\frac{5}{6} \times \frac{1}{3} =$




3) $\frac{2}{5} \times \frac{3}{8} =$



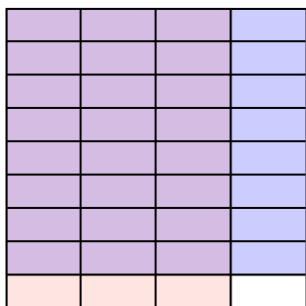
4) $\frac{3}{5} \times \frac{8}{9} =$



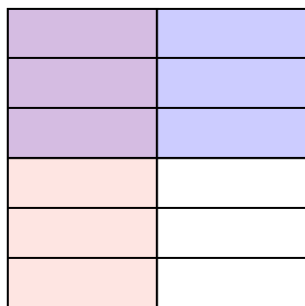
5) $\frac{1}{3} \times \frac{1}{2} =$



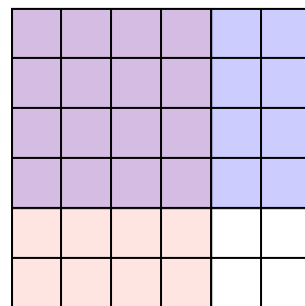
6) $\frac{3}{4} \times \frac{8}{9} =$



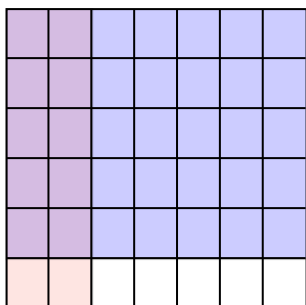
7) $\frac{1}{2} \times \frac{3}{6} =$




8) $\frac{4}{6} \times \frac{4}{6} =$




9) $\frac{2}{7} \times \frac{5}{6} =$



10) $\frac{4}{8} \times \frac{5}{8} =$



11) $\frac{1}{2} \times \frac{1}{3} =$



Answers

Ex. $\frac{6}{15}$

1. $\frac{8}{24}$

2. $\frac{5}{18}$

3. $\frac{6}{40}$

4. $\frac{24}{45}$

5. $\frac{1}{6}$

6. $\frac{24}{36}$

7. $\frac{3}{12}$

8. $\frac{16}{36}$

9. $\frac{10}{42}$

10. $\frac{20}{64}$

11. $\frac{1}{6}$